

Aluno: \_\_\_\_\_


Escola: Escola Municipalizada Deputado Armindo Marcílio Doutel de Andrade

Data: \_\_\_/\_\_\_/\_\_\_\_\_ EJA Ano de Escolaridade: **Fases: I a III**

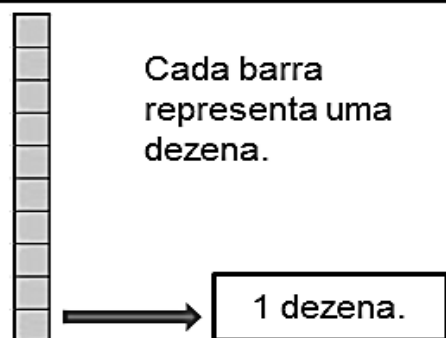
Professor (a): **Gerlane Almeida**

Disciplina: **Matemática**

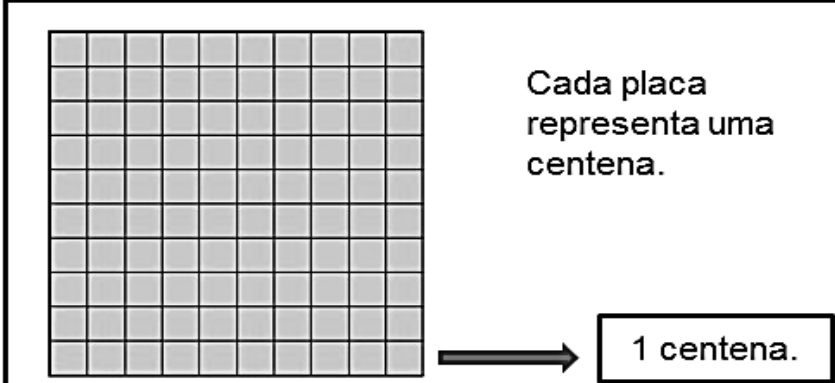
Cada quadrado representa uma unidade.



Cada barra representa uma dezena.

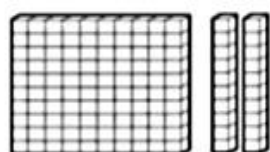


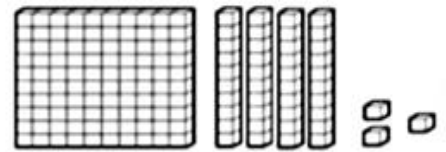
Cada placa representa uma centena.




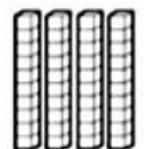
Considerando a representação acima. Escreva os números no lugar certo:

**353 - 40 - 226 - 120 - 143 -**

a) 

d) 

b) 

e) 

c) 