

Aluno (a): _____

Escola: _____

Data: ___/___/___ Ano de Escolaridade: **1º ano**

Disciplina: **Matemática**

Professor (a) _____

Semana 33: de 04 a 08 de outubro de 2021

Conteúdo(s) desenvolvido(s) Números naturais até 99 ; Reta numérica e adição.

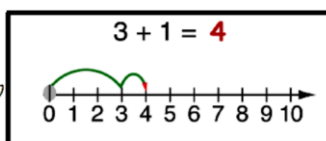
Motive-se! Aprenda! <https://youtu.be/yC1mmYLzzHE>

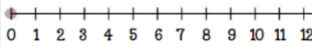
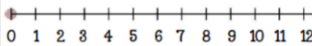
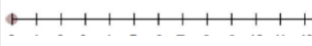
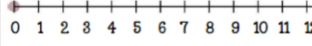
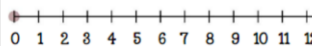
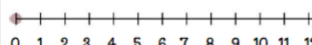
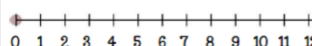
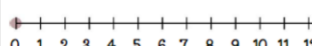
1- COMPLETE A SEQUÊNCIA NUMÉRICA COM OS NUMERAIS QUE ESTÃO FALTANDO.

1		4							20
	32			26					
		53				48			
				75	67				
81			94						100

2- MOSTRE QUE É ESPERTO E RESOLVA AS ADIÇÕES NA RETA NUMÉRICA:



 **Adição na reta numérica** 



$6 + 4 =$ _____	
$2 + 7 =$ _____	
$3 + 3 =$ _____	
$1 + 8 =$ _____	
$3 + 3 =$ _____	
$6 + 6 =$ _____	
$8 + 3 =$ _____	
$5 + 4 =$ _____	

3- CAPRICHE E ACERTE TODAS AS ADIÇÕES:

SOMANDO...

$\begin{array}{r} +1 \\ 2 \\ \hline \end{array}$	$\begin{array}{r} +2 \\ 2 \\ \hline \end{array}$	$\begin{array}{r} +3 \\ 4 \\ \hline \end{array}$	
$\begin{array}{r} +4 \\ 4 \\ \hline \end{array}$	$\begin{array}{r} +5 \\ 5 \\ \hline \end{array}$	$\begin{array}{r} +6 \\ 2 \\ \hline \end{array}$	
	$\begin{array}{r} +8 \\ 1 \\ \hline \end{array}$	$\begin{array}{r} +9 \\ 1 \\ \hline \end{array}$	$\begin{array}{r} +1 \\ 4 \\ \hline \end{array}$
	1	2	3