



Aluno: _____ Escola: _____

Data: ___/___/___

Ano de Escolaridade: 1º

Professor (a): _____

Disciplina: Matemática

Semana 31: de 20 a 24 de setembro de 2021

Conteúdo(s) desenvolvido(s): números naturais até 69; adição e subtração.

Motive-se! Aprenda! Vídeo: <https://youtu.be/OAMsxHFGcMY> ; <https://youtu.be/LbJUEJI-cuQ> ;
<https://youtu.be/rbcrje4w7IU>

1) COMPLETE COM OS NÚMEROS FALTANTES.

	2	3			7			
				15			19	
		23						30
					36			
41							48	
			54			57		
	62							69



2) RESOLVA AS ADIÇÕES COM ATENÇÃO.

$$\boxed{2} + \boxed{1} = \boxed{}$$



$$\boxed{2} + \boxed{5} = \boxed{}$$

$$\boxed{2} + \boxed{4} = \boxed{}$$

$$\boxed{3} + \boxed{4} = \boxed{}$$

$$\boxed{4} + \boxed{1} = \boxed{}$$



$$\boxed{6} + \boxed{3} = \boxed{}$$

$$\boxed{1} + \boxed{1} = \boxed{}$$

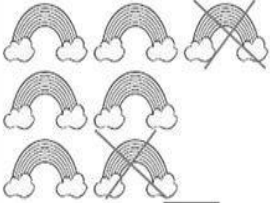



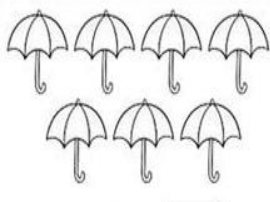

$$\boxed{8} + \boxed{2} = \boxed{}$$

$$\boxed{3} + \boxed{0} = \boxed{}$$



$$\boxed{4} + \boxed{4} = \boxed{}$$

3) OBSERVE AS SUBTRAÇÕES E RESOLVA CORRETAMENTE.

 $7-2=5$	 $7-3=\square$	 $8-2=\square$	 $8-4=\square$
 $7-1=\square$		 $8-6=\square$	

4) OBSERVE A CENA E RESPONDA COM ATENÇÃO.



♡ QUANTAS CRIANÇAS BRINCANDO?

♡ QUANTAS SÃO MENINOS?

♡ QUANTAS SÃO MENINAS?

♡ QUANTAS BORBOLETAS?



♡ QUANTOS BALÕES A MENINA ESTÁ SEGURANDO?

♡ QUANTAS FLORES?

5) VAMOS SUBTRAIR? RESOLVA OS PROBLEMINHAS.



1

GUTO TINHA... COMEU... QUANTAS RESTARAM?

 -  =


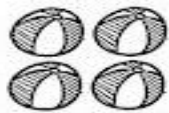
2

ANA GANHOU... ESTOUROU... QUANTOS RESTARAM?

 -  =



3

JOÃO PEGOU... CAÍRAM... QUANTAS RESTARAM?

 -  =

4

LUIZA COMPROU... DEU... QUANTOS RESTARAM?

 -  =