

Aluno (a): _____

Escola: _____


Data: ___/___/___ Ano de Escolaridade: _____

Professor(a) _____


MATEMÁTICA – ATIVIDADE 05 – 1º ANO

NOAH E LORENA ARRECADARAM
ALGUMAS PEÇAS DE ROUPAS PARA
UMA CAMPANHA BENEFICENTE.


JUNTE AS QUANTIDADES E
DESCUBRA QUANTAS PEÇAS AS
CRIANÇAS ARRECADARAM.



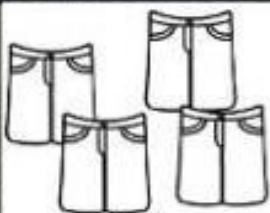
___ BLUSAS +



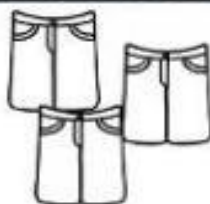
___ BLUSAS =



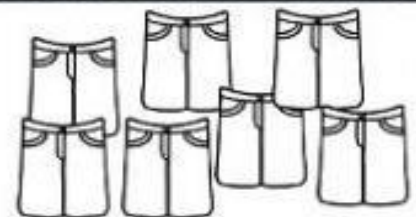
___ BLUSAS



___ CALÇAS +




___ CALÇAS =



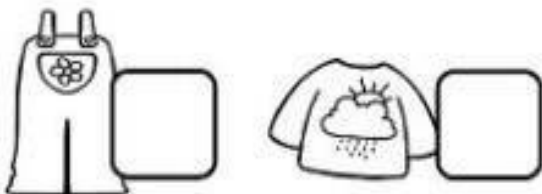
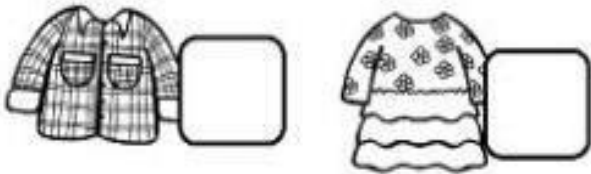
___ CALÇAS

MATEMÁTICA

OBSERVE O GRÁFICO DE ROUPAS ARRECADADAS PELAS CRIANÇAS E RESPONDA AS QUESTÕES A SEGUIR.



- QUANTOS?



QUANTOS  A MAIS

QUE  ?

QUANTAS  A MENOS

QUE  ?